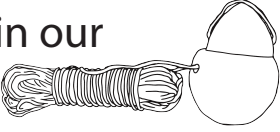
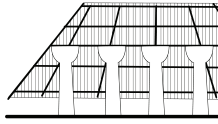


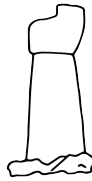








MATH ACTIVITY SHEET PART 1: NUMBER CHART
 FOR ELEMENTARY GRADE LEVELS

NAME: _____ DATE: _____ CLASS: _____

INSTRUCTIONS: COMPLETE THE ACTIVITY SHEET BY GOING THROUGH THE EXHIBIT AND FILLING IN THE NUMBER CHART BELOW. THEN USE THE NUMBER CHART TO SOLVE THE MATH PROBLEMS ON THE MATH ACTIVITY SHEET PART 2.

Gallery 2. I Tāsi yan i Tāno'		Gallery 3. Ginen i Mañaina'-ta		Gallery 4. Fanatahguiyan i Ha'āne	
	Number of fish species in our reefs 		Year the latte' first appeared 		Years the Galleon Trade ran 
	Number of conus shells found at Ñaton beach 		Height of the latte' at Taga 		Number of gun salute by Captain Henry Glass 
Gallery 5. Ti Geran Māmi		Gallery 6. Humuyong-ña i Gera		Gallery 7. I Finaloffan yan i Ma'mai'la	
	Year the Japanese Imperial Army invaded the Island 		Years Sgt. Yokoi hid in the jungle 		Year Guam elects a governor 
	Number of men helped in Atāte 		Liberation Day 		Century of Cultural Sovereignty 